

ST. ARNOLD'S CENTRAL SCHOOL, PUNE

TERM -1 EXAMINATION, 2018-19

SUBJECT – COMPUTER

STD : II

DIV : _____

MM : 25

NAME : _____

ROLL NO : _____

Q.1 Choose the correct option and complete the sentence. (5)

a. A _____ is a small blinking line on the screen. (pointer / cursor)

b. If the electricity goes off, the _____ makes the computer work.

(CPU / UPS)

c. When the window is active, it turns _____. (blue / gray)

d. Data and instruction together is known as _____. (Input / Output)

e. _____ copy is the printed copy on paper. (Soft / Hard)

Q. 2 State True or False (5)

a. A computer can make mistake. _____

b. A printer shows the text on the monitor. _____

c. Title bar is located at the top of the desktop. _____

d. Monitor is the output device. _____

e. Caps Lock key helps to type letters in capital. _____

Q.3 Match the following.

(3)

- | A | B |
|----------------------------------|-------------------------|
| 1. Speakers | a. 26 |
| 2. Windows | b. 104 |
| 3. Microphone | c. Operating System |
| 4. Total number keys on keyboard | d. To listen music |
| 5. Desktop | e. To record voice |
| 6. Alphabet keys | f. First display screen |

Ans : 1. _____ 2. _____ 3. _____ 4. _____ 5. _____ 6. _____

Q.4 Answer the following

(4)

a. Write any 2 places where computers are used.

Ans : 1. _____ 2. _____

b. Name any 2 input devices.

Ans: 1. _____ 2. _____

c. Name any 2 special keys.

Ans : 1. _____ 2. _____




d. Name any 2 types of computers.

Ans : 1. _____ 2. _____

Q. 5 Look at the picture and write

(I) for Input,(O) for Output and (P) for Processing in the given box. (3)

A.

		
Fruits	Fruit Jam	Cooking of fruits
<input type="text"/>	<input type="text"/>	<input type="text"/>

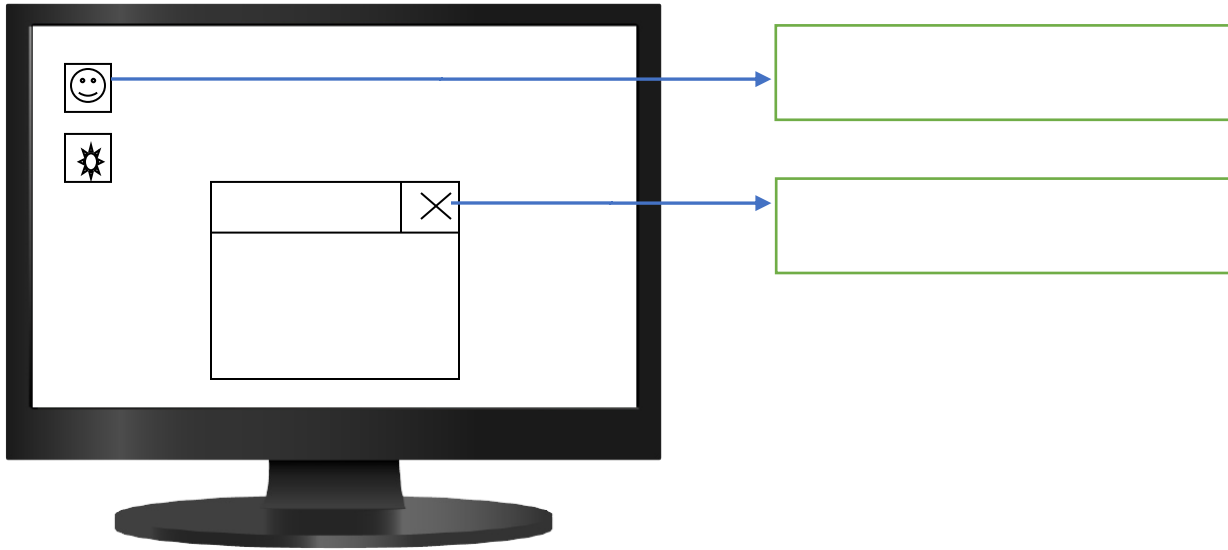
B.

		
Washing Machine	Dirty clothes	Clean T-shirt
<input type="text"/>	<input type="text"/>	<input type="text"/>

Q. 6 Do as directed.

(5)

A. Label the pointed parts in the given box.



B. Label the keys of the keyboard in the given box.

