

ST. ARNOLD'S CENTRAL SCHOOL, PUNE

TERM-1 EXAMINATION, 2017-2018

SUBJECT – MATHS

STD – II

DIV: _____

MM : 25

NAME _____

ROLL NO : _____

Q1) Fill in the blanks.

(4)

- a) A cube has _____ vetices.
- b) 100 rupees and 95 paise - _____.
- c) The tenth month of the year is _____.
- d) Place value of 7 in 874 is _____.
- e) We read the time 2:30 as _____.
- f) $42 - 10 =$ _____.
- g) All the sides of a square are _____.
- h) The money that we use is called _____.

Q 2) Match the following.

(2)

1) ₹ 1


a) has one flat surface

2)



b) 1000

3)



c) 100 p

4) 1, 10, 100,

d) has two flat surface

Ans : 1 : _____, 2 : _____, 3 : _____, 4 : _____.

Q 3) Write the time shown by these clocks.

(2)



Ans : _____

Ans : _____

Q 4) Do as directed .

(4)

a) Add ₹ 34 . 15 and ₹ 37 . 28

b) Subtract ₹ 42 . 30 from ₹ 83 . 45

Q 5) Solve the following.

(5)

a) T O

$$\begin{array}{r} 42 \\ - 23 \\ \hline \end{array}$$

b) T O

$$\begin{array}{r} 50 \\ - 47 \\ \hline \end{array}$$

c) T O

$$\begin{array}{r} 99 \\ - 01 \\ \hline \end{array}$$

d) T O

$$\begin{array}{r} 66 \\ - 57 \\ \hline \end{array}$$

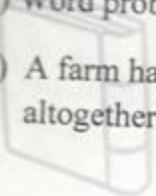
e) T O

$$\begin{array}{r} 72 \\ - 19 \\ \hline \end{array}$$

Q 6) Word problem

(6)

- a) A farm has 26 hens , 28 cows and 29 sheep . How many animals does the farm have altogether ?



00.85 3

- b) The students of Classes II A and II B put up 83 charts in a hall. If II A students made 36 charts , how many charts did the II B students make?



c) Geeta purchased following item. Prepare a bill for her.



₹ 25.00



₹ 5.00



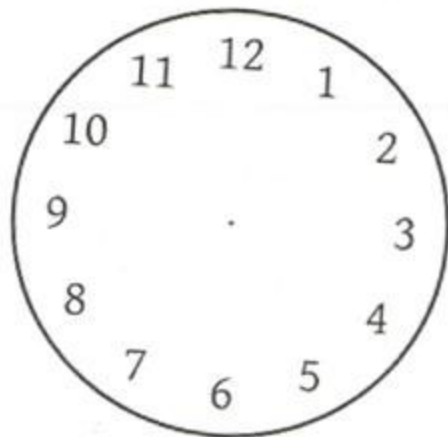
₹ 28.00

Q 7) Draw hands on the clock face to show the time.

a) Quarter past 12



b) 3 : 45



(2)